

© International Baccalaureate Organization 2023

All rights reserved. No part of this product may be reproduced in any form or by any electronic or mechanical means, including information storage and retrieval systems, without the prior written permission from the IB. Additionally, the license tied with this product prohibits use of any selected files or extracts from this product. Use by third parties, including but not limited to publishers, private teachers, tutoring or study services, preparatory schools, vendors operating curriculum mapping services or teacher resource digital platforms and app developers, whether fee-covered or not, is prohibited and is a criminal offense.

More information on how to request written permission in the form of a license can be obtained from <https://ibo.org/become-an-ib-school/ib-publishing/licensing/applying-for-a-license/>.

© Organisation du Baccalauréat International 2023

Tous droits réservés. Aucune partie de ce produit ne peut être reproduite sous quelque forme ni par quelque moyen que ce soit, électronique ou mécanique, y compris des systèmes de stockage et de récupération d'informations, sans l'autorisation écrite préalable de l'IB. De plus, la licence associée à ce produit interdit toute utilisation de tout fichier ou extrait sélectionné dans ce produit. L'utilisation par des tiers, y compris, sans toutefois s'y limiter, des éditeurs, des professeurs particuliers, des services de tutorat ou d'aide aux études, des établissements de préparation à l'enseignement supérieur, des fournisseurs de services de planification des programmes d'études, des gestionnaires de plateformes pédagogiques en ligne, et des développeurs d'applications, moyennant paiement ou non, est interdite et constitue une infraction pénale.

Pour plus d'informations sur la procédure à suivre pour obtenir une autorisation écrite sous la forme d'une licence, rendez-vous à l'adresse <https://ibo.org/become-an-ib-school/ib-publishing/licensing/applying-for-a-license/>.

© Organización del Bachillerato Internacional, 2023

Todos los derechos reservados. No se podrá reproducir ninguna parte de este producto de ninguna forma ni por ningún medio electrónico o mecánico, incluidos los sistemas de almacenamiento y recuperación de información, sin la previa autorización por escrito del IB. Además, la licencia vinculada a este producto prohíbe el uso de todo archivo o fragmento seleccionado de este producto. El uso por parte de terceros —lo que incluye, a título enunciativo, editoriales, profesores particulares, servicios de apoyo académico o ayuda para el estudio, colegios preparatorios, desarrolladores de aplicaciones y entidades que presten servicios de planificación curricular u ofrezcan recursos para docentes mediante plataformas digitales—, ya sea incluido en tasas o no, está prohibido y constituye un delito.

En este enlace encontrará más información sobre cómo solicitar una autorización por escrito en forma de licencia: <https://ibo.org/become-an-ib-school/ib-publishing/licensing/applying-for-a-license/>.

**Sports, exercise and health science**  
**Standard level**  
**Paper 2**

3 May 2023

**Zone A** morning | **Zone B** afternoon | **Zone C** morning

Candidate session number

1 hour 15 minutes

|  |  |  |  |  |  |  |  |  |  |
|--|--|--|--|--|--|--|--|--|--|
|  |  |  |  |  |  |  |  |  |  |
|--|--|--|--|--|--|--|--|--|--|

**Instructions to candidates**

- Write your session number in the boxes above.
- Do not open this examination paper until instructed to do so.
- Section A: answer all questions.
- Section B: answer one question.
- Answers must be written within the answer boxes provided.
- A calculator is required for this paper.
- The maximum mark for this examination paper is **[50 marks]**.



## Section A

Answer **all** questions. Answers must be written within the answer boxes provided.

1. A study compared the physical characteristics of 55 experienced female rock climbers. They were divided into lower, advanced, and elite ability groups based on self-reported climbing experience. They completed a 10-minute warm-up prior to the testing sessions. The mean results ( $\pm$ SD) for some of the tests are shown.

**Figure 1: (a) Forearm volume measurement, (b) counter movement jump, and (c) power slap test.**

Removed for copyright reasons

(This question continues on the following page)



20EP02

**(Question 1 continued)**

- (a) (i) State the mean forearm volume, in ml, for the lower ability group. [1]

.....  
.....

- (a) (ii) Calculate the difference in distance achieved, in cm, for the mean power slap between the elite and the advanced ability groups. [1]

.....  
.....

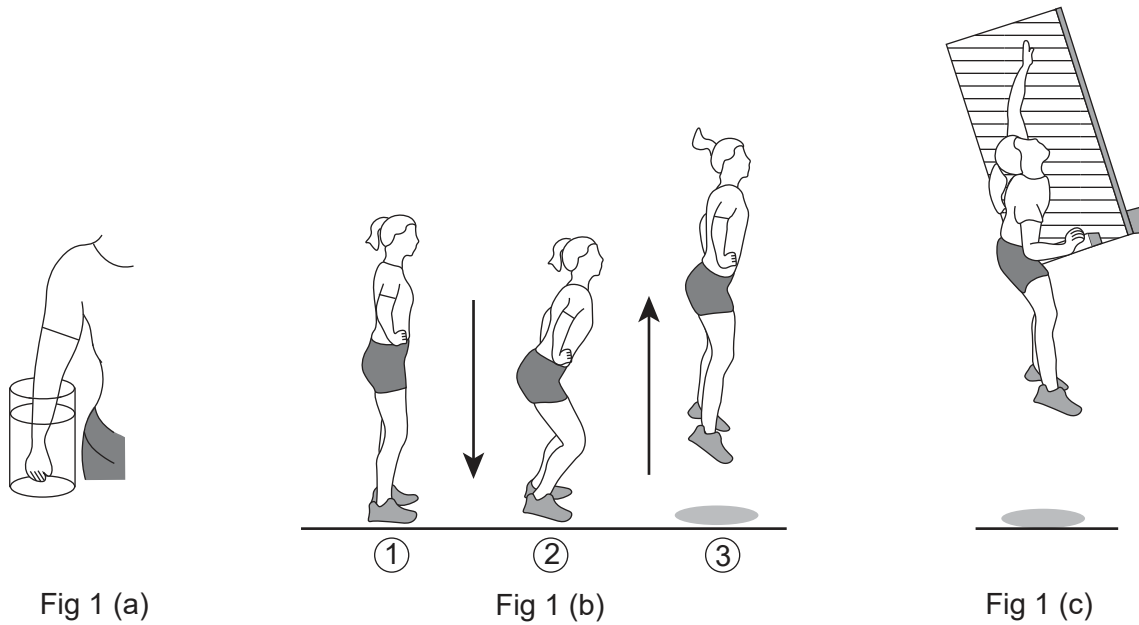
- (b) Explain the importance of performing a warm-up prior to conducting a maximal test with respect to study design. [3]

.....  
.....  
.....  
.....  
.....  
.....  
.....  
.....

**(This question continues on the following page)**



(Question 1 continued)



- (c) (i) Identify the type of movement at the knees during the upward jumping phase (3) of the counter movement jump shown in **Figure 1(b)**. [1]

.....  
.....

- (c) (ii) Outline the muscle contractions required to produce the movement identified in Question 1c(i). [2]

.....  
.....  
.....  
.....

(This question continues on the following page)



**(Question 1 continued)**

(d) **Figure 1(c)** shows a person performing the power slap test.

Describe the anatomical position of the carpals relative to the clavicle of the extended, left arm.

[2]

.....

.....

.....

.....



2. A study of 26 untrained 20–30 year old men investigated the potential health benefits of regular participation in team handball training. The participants were allocated randomly to either the handball group, which completed two training sessions each week for 12 weeks, or an inactive control group.  $VO_2$ max, fat percentage, blood pressure, resting heart rate and multistage fitness tests were carried out at the start and end of the study period and the mean results (+/-SD) are shown in the table.

|  | Handball group |      |         |      | Inactive control group |     |         |     |
|--|----------------|------|---------|------|------------------------|-----|---------|-----|
|  | Week 0         | SD   | Week 12 | SD   | Week 0                 | SD  | Week 12 | SD  |
| <b><math>VO_2</math>max / ml min<sup>-1</sup>kg<sup>-1</sup></b> | 41.9           | 6.7  | 46.5*   | 6.1  | 41.6                   | 5.8 | 41.6    | 5.8 |
| <b>Fat percentage / %</b>  | 27.9           | 10.6 | 26.2*   | 10.7 | 28.6                   | 7.8 | 28.6    | 7.8 |
| <b>Systolic blood pressure / mmHg</b>                            | 111            | 11   | 113     | 10   | 113                    | 8   | 113     | 10  |
| <b>Diastolic blood pressure / mmHg</b>                           | 67             | 7    | 68      | 8    | 67                     | 6   | 69      | 5   |
| <b>Resting heart rate / bpm</b>                                  | 56             | 9    | 53      | 9    | 60                     | 5   | 57      | 6   |
| <b>Multistage fitness distance / m</b>                           | 1880           | 80   | 2480*   | 1069 | 1750                   | 750 | 1750    | 750 |

\* p<0.05 from week 0

- (a) Identify the group whose results showed a significant improvement from week 0. [1]

.....

.....

- (b) Calculate the percentage difference in the  $VO_2$ max for the handball group from week 0 to week 12. [1]

.....

.....

(This question continues on the following page)



20EP06

**(Question 2 continued)**

(c) Discuss the hypothesis that regular participation in recreational active team sports training provides beneficial effects for the cardiovascular system. [3]

.....

.....

.....

.....

.....

.....

(d) Distinguish between saturated and unsaturated fatty acids. [3]

.....

.....

.....

.....

.....

.....

(e) Deception is used in team sports such as handball to gain an advantage over the opposition. Using a sporting example, explain how an athlete manipulates the psychological refractory period to gain an advantage over an opponent. [4]

.....

.....

.....

.....

.....

.....

.....

.....

.....

.....





3. The diagram shows a person kayaking.



The flatwater 200 m (one-person kayak) world records are:

|        |                |
|--------|----------------|
| Male   | 33.380 seconds |
| Female | 37.898 seconds |

(a) Describe the production of ATP by the predominant energy system used by an elite kayaker paddling during a flatwater 200 m race.

[3]

.....

.....

.....

.....

.....

.....

.....

.....

(This question continues on the following page)



**(Question 3 continued)**

- (b) Outline the variability in maximal oxygen consumption between arm ergometry and running.

[2]

.....

.....

.....

.....

- (c) Using examples, describe **one** of Newton's laws of motion during a flatwater 200 m kayak race.

[3]

.....

.....

.....

.....

.....

.....

.....

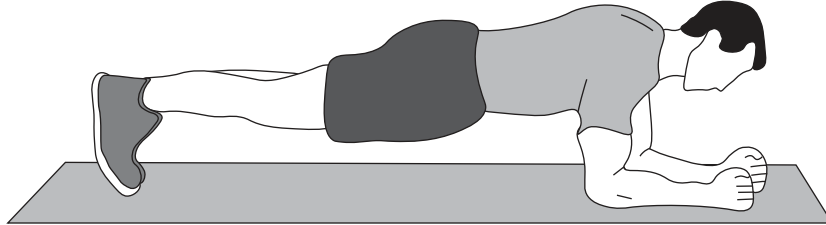
.....



### Section B

Answer **one** question. Answers must be written within the answer boxes provided.

4. The diagram shows someone performing the 'plank' exercise.




- (a) Discuss the systolic and diastolic blood pressure response when holding the 'plank' exercise for one minute. [3]
  - (b) Describe **four** types of feedback that could be used when teaching a skill to a cognitive (early phase) learner. [4]
  - (c) Compare and contrast the relative contributions of energy systems during a 400 m sprint and 10 000 m run. [4]
  - (d) A marathon runner is training for the Olympics. Describe the resultant cardiovascular adaptations that will improve their performance. [5]
  - (e) During a tennis tournament, an elite tennis player had a first serve percentage of 73 % and was able to serve accurately to a chosen area of the service box. A novice tennis player may struggle to serve without error on a regular basis. Discuss **four** other differences in skill execution that exist between a novice tennis player and an elite tennis player. [4]
- 5.
- (a) Compare and contrast the excess post-exercise oxygen consumption for a trained athlete and an untrained individual. [3]
  - (b) Describe the process of increased gaseous exchange at the alveoli during exercise. [4]
  - (c) A cyclist completes a 50 km bike ride in hot weather, maintaining a steady pace on flat terrain throughout. Describe the cyclist's cardiovascular drift response during the ride. [3]
  - (d) Using the sliding filament theory, explain the changes that occur at the sarcomere during a concentric isotonic contraction. [6]
  - (e) Discuss how memory and selective attention interact in the cognitive phase of learning a skill. [4]

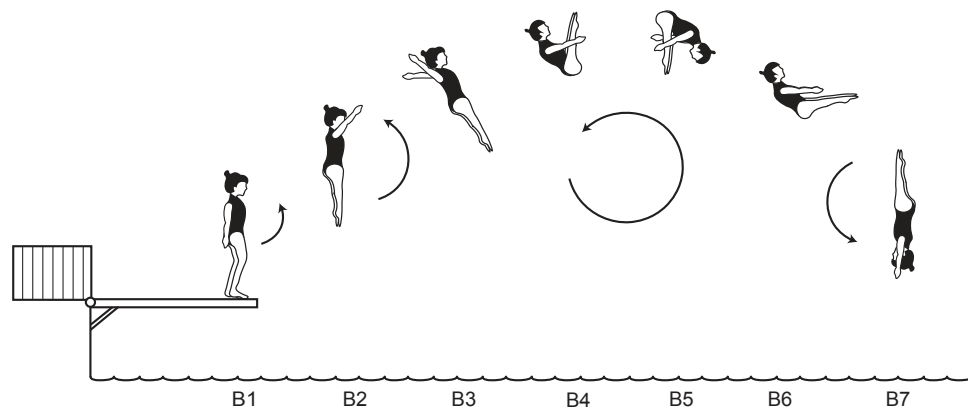


- 6. (a) Outline the chemical control of ventilation from rest to exercise. [3]
- (b) Explain the role of insulin and muscle contraction on glucose uptake during exercise. [4]

**Dive A**



**Dive B**



- (c) Compare and contrast how a diver uses the concept of angular momentum to perform dives A and B. [5]
- (d) Discuss **one** type of presentation you would use to maximize the acquisition of a skill of your choice. [3]
- (e) Outline **five** characteristics common to muscle tissue. [5]



A large rectangular area containing 25 horizontal dotted lines for writing.



20EP12

A large rectangular area containing 25 horizontal dotted lines for writing.



20EP13

Turn over

A large rectangular area containing 25 horizontal dotted lines for writing.



20EP14

A large rectangular area containing 25 horizontal dotted lines for writing.



20EP15

Turn over



A large rectangular area containing 25 horizontal dotted lines, intended for writing.



20EP16

A large rectangular area containing 25 horizontal dotted lines for writing.



20EP17

**Disclaimer:**

Content used in IB assessments is taken from authentic, third-party sources. The views expressed within them belong to their individual authors and/or publishers and do not necessarily reflect the views of the IB.

**References:**

2. Material from: Hornstrup, H., et al., Cardiovascular, muscular, and skeletal adaptations to recreational team handball training: a randomized controlled trial with young adult untrained men. *Eur J Appl Physiol* published 2019. Springer Link reproduced with permission of SNCSC.

**All other texts, graphics and illustrations © International Baccalaureate Organization 2023**



20EP18

Please **do not** write on this page.

Answers written on this page  
will not be marked.



20EP19

Please **do not** write on this page.

Answers written on this page  
will not be marked.



20EP20